



1 Finding Decades



Find the following values:

1. 10
2. 100
3. 1000
4. 10000
5. 100000
6. 0.1
7. 0.01


2 Finding Minor Grid Lines



A little trickier:

1. 20
2. 80
3. 3000
4. 40000
5. 0.6
6. 0.08

3 Finding Other Values

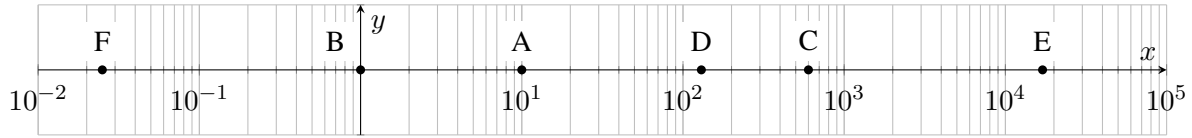


Lastly:

1. 1500
2. 45
3. 22000
4. 0.25

4 Finding Values from Plot

Determine the values labeled on the plot:



5 Find Function Values

Try it on a plot of data. Find value of function at these frequencies:

1. 100 Hz
2. 20 kHz
3. 1.5 MHz

